



The Punjab School
Controller of Examination

DOC.REF.
COE/29/11/24

Page | 1 of 8

Issue # 01

Revision #: 00

Admission Test Syllabus to Class IV 2025
(Doc No : SylID- 07)

This is for the information of the parents that a few vacancies for admission to the class arise due to transfers and postings of their parents to other cities or for some other personal reasons. These are purely merit-based admissions.

Admission to these vacancies are finalized on the basis of the results of the written examination in the subjects of English, Urdu & Mathematics and a subsequent interview. An oral test for Quran is conducted separately.

Syllabi for the written examination is given below:

ENGLISH:

Grammar: Nouns (Proper, Common, Countable and Uncountable), Pronouns, Adjectives, Singular/ Plural, Verbs (Form of verbs), Articles, Auxiliary Verbs, Prepositions. (Fill in the blanks, Match the Columns, Identification, Underline the Correct Part of Speech etc.), Genders (Masculine and Feminine). Conjunctions

Composition: Paragraph Writing (Descriptive e.g. My Best Friend, My Teacher, My Parents etc.)
10 sentences

Application (Formal e.g. Sick Leave etc.), Sentence Making, Spelling (missing letters), Reading Comprehension (Q/Ans, MCQs etc.), **Tenses** (Translation from Urdu into English, Present, Past Continuous).

MATHEMATICS:

*Whole Numbers, *Number Operations, Fractions, *Measurement (length, mass, capacity)
Measurement (time), *Geometry, *Data Handling.

Urdu:

الاء، جملے، الفاظ معانی، اعراب * ابتدائی گرامر واحد جمع، مذکر مؤنث، متضاد، مترادف، حروف جار، اسم صفت، اسم نکرہ، اسم معرفہ، اسم ضمیر، فعل، فاعل، مفعول، اقراری، انکاری اور استفہامی جملے رموز اور قاف، * لفظی گنتی: * اسلامی، انگریزی مہینوں کے نام، درخواست: (بیماری، ضروری کام)، کسی عنوان پر دس جملے (مضمون) تفہیم عبارت

Quran:

ناظرہ پارے 3 تا 8 * آسان تجوید: سبق نمبر 1 * نماز، تکبیر تحریمہ تا درود اور ابراہیمی * دعائیں: صبح و شام کی دعا، گھر میں داخل ہونے اور نکلنے کی دعا اور احادیث با ترجمہ، حفظ
سورۃ الاخلاص فاتحہ

A list of successful candidates is displayed on the notice board in their respective wings. The parents have to collect Syllabus Booklet, Booklist, etc along with the prescribed Admission Form from the relevant Wing Office. Correctly filled in Admission Form duly signed by the Wing Head, accompanied with the dues, is submitted in the Fee Section.

Only after the observance of the above-mentioned formalities a student, correctly attired in prescribed School Uniform and possessing the relevant books and stationery, is eligible to sit in the class.

Note: Model Question papers are enclosed. Please note that the **prescribed topics** are purely guidelines as per level III for the preparation of Admission Test. Marks allocation and nature of questions in actual papers may vary in any subject.

Test Date: Sunday 16th February, 2025 at 8:30 am

CONTROLLED DOCUMENT
Unauthorized duplication is prohibited



The Punjab School
Controller of Examination

DOC.REF.
COE/ 29/11/24

Page | 2 of 8

Issue # 01

Revision #: 00

Admission Test Model Paper to Class IV 2025

(Doc No : SyID- 07)

Time: 1 hour 30 Min

Mathematics

Marks: 75

Q1. Encircle the correct answer.

/10

1	Roman number XVI is equal to	14	16	18	19
2	25 can be rounded off to the nearest 10 as	20	25	26	30
3	When any number multiplied by 0, we get	0	1	10	100
4	By dividing 24 by 6, we get	4	5	6	7
5	By dividing 84 by 4 we, get	18	19	20	21
6	3246 is ----- less than 1886	1350	1360	1370	1380
7	Equivalent fraction to $\frac{2}{5}$ is	$\frac{4}{3}$	$\frac{4}{7}$	$\frac{4}{6}$	$\frac{4}{10}$
8	Sum of $\frac{4}{15}$ and $\frac{3}{15}$ is	$\frac{1}{15}$	$\frac{7}{15}$	$\frac{1}{30}$	$\frac{7}{30}$
9	1 litre is equal to	10 ml	100 ml	1000 ml	10 000 ml
10	Children go to school at 8	a.p.	P.a.	p.m.	a.m.

Q2. Fill in the blanks:

/5

- (i) Roman number XIX is equal to _____
- (ii) Difference of 6351 and 1265 is _____
- (iii) Sum of $\frac{5}{14}$ and $\frac{4}{14}$ is _____
- (iv) Abbreviation of kilograms is _____
- (v) 1 day = _____ hours

PART – II

Attempt all the questions on Answer Sheet. Use of calculator is not allowed. (12×5=60)

Q3 .Write in numeral:

“Forty one thousand, nine hundred and ninety nine” _____.

Q4. Write in ascending order.

476, 471, 472, 335, 345

Q5 Solve: 4 7 5 2

 + 3 5 9 6

Q6. Solve: 8 6 7 8

 - 7 8 9 6



The Punjab School
Controller of Examination

Admission Test Model Paper to Class IV 2025
(Doc No : SylD- 07)

DOC.REF.
COE/ 29/11/24

Page | 3 of 8

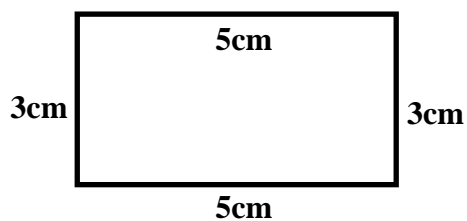
Issue # 01

Revision #: 00

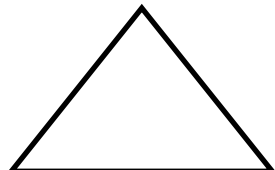
Q7. If Ali spends Rs 24 in day, then how many rupees will he spend is 4 days.

Q8. There are 72 mango trees in 6 rows. How many mango trees are there in 1 row?

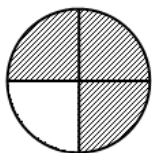
Q9. Find the perimeter of the rectangle.



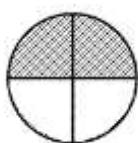
Q10. Draw two symmetry lines of each shape.




Q11. Write fraction and solve. Colour the result shape also.



-



=



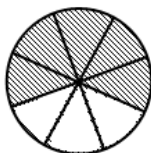
-



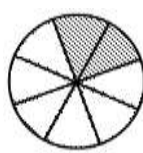
=




Q12.




-




=



-



=





The Punjab School
Controller of Examination

Admission Test Model Paper to Class IV 2025
(Doc No : SyID- 07)

DOC.REF.
COE/ 29/11/24

Page | 4 of 8

Issue # 01

Revision #: 00

Q14. Fill in the box

$3 \times 8 = \text{-----}$

$4 \times 6 = \text{-----}$

$7 \times 3 = \text{-----}$

$3 \times 9 = \text{-----}$

$5 \times 9 = \text{-----}$

Q15. $30 \div 5 = \text{-----}$

$18 \div 3 = \text{-----}$

$25 \div 5 = \text{-----}$

$36 \div 4 = \text{-----}$

$20 \div 4 = \text{-----}$



The Punjab School
Controller of Examination

DOC.REF.
COE/ 29/11/24

Page | 5 of 8

Issue # 01

Revision #: 00

Admission Test Model Paper to Class IV 2025
(Doc No : SyID- 07)

Time: 1 hour 30 Min

English

Marks: 75

OBJECTIVE

Note: Use this question paper to write the answers of the following questions. No mark will be awarded for cutting or over writing. This paper must be tagged with the Answer Sheet.

Q1: Read the passage carefully and answer the following questions. 10

"Rahim was a poor fisherman. He lived on the bank of a stream that flows into the River Chenab. When the sunlight shone on the water, the stream looked like a thin, golden ribbon. So people called it the Golden River. One day Rahim went off fishing, he pulled the net to the bank and found a beautiful, golden fish inside. To his surprise, the fish spoke to him. "Throw me back into the water". It said again, "Please throw me back. If I lie in the hot sun, I will die."

Answer the questions:

1. Where does the stream flow?

2. What is a "golden ribbon"?

3. What did people call that stream?

4. Find out two adjectives from the passage and write them down.

5. Write down the title of the given passage.



The Punjab School
Controller of Examination

Admission Test Model Paper to Class IV 2025
(Doc No : SyID- 07)

DOC.REF.
COE/ 29/11/24

Page | 6 of 8

Issue # 01

Revision #: 00

Q2: (a) Sort the following nouns list according to the headings given below: 4
Iran, Monkey, Babar, Lahore Fort, Country, Gardener Mosque, Quetta

Sr. No	Common	Proper
1		
2		
3		
4		

(b) Write the missing forms of verbs: 4

- (a) throw _____
- (b) _____ thought _____
- (c) light _____
- (d) _____ driven

(c) Circle the pronouns in this passage: 5

The children were sharing their holiday plans with their teacher, Miss Lee. One boy told her that he was going to stay with his grandparents.

(d) Change these nouns to adjectives: 4

- (a) home _____ (b) grace _____
- (c) child _____ (d) music _____

Q3 (a) Use articles a, an, the to fill in the blank spaces: 4

- (a) I saw _____ elephant yesterday.
- (b) Ahmed is _____ best boy from my classmates.
- (c) He is _____ honest man.
- (d) Can you tell me _____ story?

(c) Fill in the blanks with correct prepositions: into, to, on 3

- (a) He began _____ cry.
- (b) The Chief Guest has arrived _____ time.
- (c) The ball rolled _____ a hole.



The Punjab School
Controller of Examination

Admission Test Model Paper to Class IV 2025
(Doc No : SyID- 07)

DOC.REF.

COE/ 29/11/24

Page | 7 of 8

Issue # 01

Revision #: 00

(d) Fill in the blanks with verbs do and have:

5

- (a) All of these mangoes _____ rotten.
(b) We _____ beautiful cats.
(c) They _____ gone to Sydney.
(d) I _____ not feel cold.
(e) _____ these colours match?

Q4: Write an essay on any one of the following topics:

10

- (i) My Best Friend (ii) My Teacher

Q5: Write an application for an urgent piece of work.

10

Q6: Make sentences of the following words:

8

(a) festival

(b) waste

(c) carelessly

(d) basket

Q7: Translate the following sentences into English:

8

1. کیا وہ کپڑے دھو رہے تھے؟

2. پرندے اڑ رہے ہیں۔

3. بچے ہاکی کھیل رہے تھے۔

4. علی پودوں کو پانی دے رہا تھا۔

5. کیا مٹی دودھ پی رہی ہے؟



The Punjab School
Controller of Examination

DOC.REF.
COE/ 29/11/24

Page | 8 of 8

Issue # 01

Revision #: 00

Admission Test Model Paper to Class IV 2025

(Doc No : SyID- 07)

کل نمبر: 75

پرچہ: اُردو

وقت: ایک گھنٹا تیس منٹ

5

سوال نمبر 1 (الف) مندرجہ ذیل الفاظ کے معنی لکھیے۔ (پانچ)

رابطہ: _____

معلم: _____

5

(ب) درج ذیل الفاظ کو واحد جمع کے لحاظ سے دیے گئے کالم میں لکھیے۔ (کوئی سے پانچ)

5

(ج) الفاظ کے متضاد لکھیے۔ (کوئی سے پانچ)

بہادر: _____

صبح: _____

5

(د) اردو گنتی لکھیں۔ (کوئی سے پانچ)

۶۹ _____

۵۵ _____

5

(ه) درج ذیل جملوں میں سے فعل، فاعل اور مفعول الگ کیجیے۔

۲۔ بیل چارا کھا رہا ہے۔

۱۔ ڈاکیا خط لاتا ہے۔

مفعول

فاعل

فعل

5

سوال نمبر 2 درج ذیل جملوں کو سوالیہ جملوں اور انکاری جملوں میں تبدیل کیجیے۔

انکاری جملے	استفہامی جملے	سادہ جملے
		علی تیسری جماعت میں پڑھتا ہے۔
		ہمارے گھر میں ساتھ لوگ رہتے ہی۔

5

سوال نمبر 3 درست عددی ترتیب لکھ کر جملے مکمل کیجیے۔ (کوئی سے پانچ)

چڑیوں میں _____ چڑیا بڑی ہے۔ (تیسرا، تیسری، تیسرے)

10

سوال نمبر 4 "ہمارے پیارے نبیؐ عنوان کے تحت مضمون لکھیے۔

10

سوال نمبر 5 نظم/عبارت پڑھ کر سوالات کے جوابات دیجیے۔ (نادیدہ)

بلبل تھا کوئی اداس بیٹھا
اُڑنے چگنے میں دن گزارا
ہر چیز پہ چھا گیا اندھیرا
جگنو کوئی پاس ہی سے بولا
کیڑا ہوں اگرچہ میں ذراسا
میں راہ میں روشنی کروں گا
چکا کے مجھے دیا بنایا
آتے ہیں جو کام دوسروں کے

ٹہنی پہ کسی شجر کی تنہا
کہتا تھا کہ رات سر پہ آئی
پہنچوں کس طرح آشیاں تک
سن کر بلبل کی آہ و زاری
حاضر ہوں مدد کو جان و دل سے
کیا غم ہے جو رات ہے اندھیری
اللہ نے دی ہے مجھ کو مشعل
ہیں لوگ وہی جہاں میں اچھے

س ۱۔ بلبل کہاں بیٹھا تھا؟

س ۲۔ بلبل کیوں اداس تھا؟

س ۳۔ کون سے لوگ اچھے ہوتے ہیں؟

س ۴۔ کیا آپ نے کبھی کسی کی مدد کی؟ تفصیل سے لکھیے۔

10

سوال 6 املا

10

سوال نمبر 7 درخواست مثلاً۔ اپنے اسکول کے پرنسپل کے نام ضروری کام کے لیے درخواست لکھیے۔ (نادیدہ)

CONTROLLED DOCUMENT

Unauthorized duplication is prohibited